

Name: _____

Score: _____

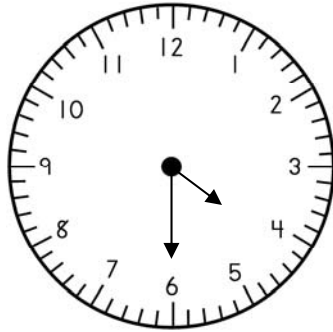
Morning Math

Today is: _____

Please finish:

23, 25, 27, _____, _____, _____, _____, _____, _____

What is the time?

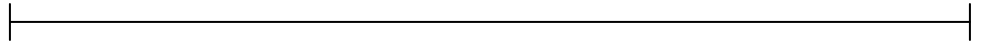


How much?



Please measure the line to the nearest inch.

_____ in.



Please circle the greatest number.

273 254 225

Use >, <, or =.

24 ○ 6 + 5 + 7 + 5

How many stars are to the left of the rectangle?



Please solve.

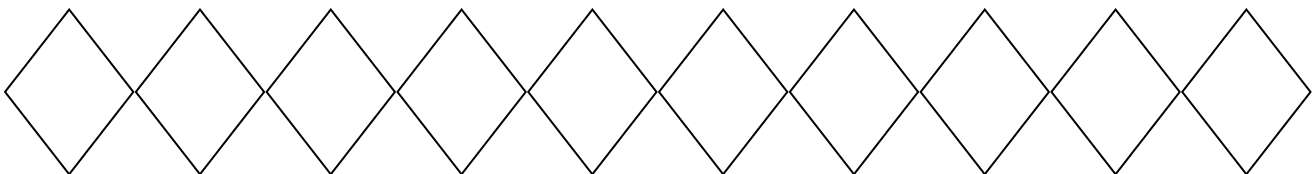
$$\begin{array}{r} 49 \\ + 30 \\ \hline \end{array}$$

$$\begin{array}{r} 274 \\ + 225 \\ \hline \end{array}$$

$$\begin{array}{r} 85 \\ - 24 \\ \hline \end{array}$$

$$\begin{array}{r} 546 \\ - 124 \\ \hline \end{array}$$

Please write the numbers from 101 to 110. Color the odd numbers yellow.



Name: _____

Score: _____

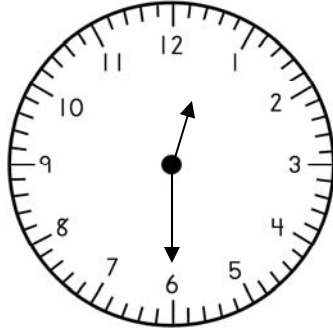
Homework Math

Today is: _____

Please finish:

24, 26, 28, _____, _____, _____, _____, _____, _____

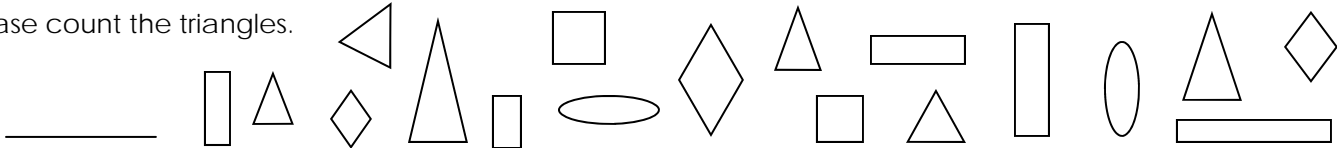
What is the time?



How much?



Please count the triangles.



Please circle the greatest number.

158 161 165

Use >, <, or =.

19 ○ 4 + 7 + 3 + 5

How many stars are to the right of the rectangle?



Please solve.

$$\begin{array}{r} 33 \\ + 25 \\ \hline \end{array}$$

$$\begin{array}{r} 165 \\ + 521 \\ \hline \end{array}$$

$$\begin{array}{r} 57 \\ - 15 \\ \hline \end{array}$$

$$\begin{array}{r} 487 \\ - 232 \\ \hline \end{array}$$

Please write the numbers from 101 to 110. Draw an X through the number that comes after 103.

